

Name: \_\_\_\_\_

Score: \_\_\_\_\_

### Daily Work

Today is: \_\_\_\_\_

How much?

\_\_\_\_\_



Complete:

112, 113, 114, \_\_\_\_\_, \_\_\_\_\_

Greater/Less than:

225 ○ 126

Circle the largest number:

9,300    9,030    9,003

Solve:


$$\begin{array}{r} 563 \\ - 232 \\ \hline \end{array} \qquad \begin{array}{r} 44 \\ + 24 \\ \hline \end{array}$$

Please order these numbers from least to greatest.

142	125	108
-----	-----	-----

\_\_\_\_\_

What might happen next? Be specific! Please use complete sentences and remember all rules! Indent, please!




---



---



---



---



---



---



---



---



---



---



---



---



---



---



---



---



---



---



---



---



---



---

Name: \_\_\_\_\_

Score: \_\_\_\_\_

Daily Work

Today is: \_\_\_\_\_

How much?



\_\_\_\_\_

Please complete.

55, 65, 75, \_\_\_\_\_, \_\_\_\_\_

Greater/Less Than

166 ○ 175

Circle the even numbers.

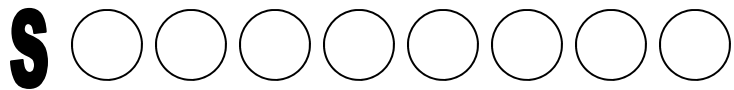
93 74 81 66

Solve:

$$\begin{array}{r} 257 \\ - 125 \\ \hline \end{array}$$

$$\begin{array}{r} 465 \\ + 324 \\ \hline \end{array}$$

- Put an X in the fourth circle from the "S".
- Color the sixth circle yellow.



What might happen next? Be specific! Please use complete sentences and remember all rules!



\_\_\_\_\_

-----

\_\_\_\_\_

-----

\_\_\_\_\_

-----

\_\_\_\_\_

-----

\_\_\_\_\_

-----

\_\_\_\_\_

-----

Name: \_\_\_\_\_

Score: \_\_\_\_\_

### Daily Work

Today is: \_\_\_\_\_

How much?

\_\_\_\_\_



Complete:

61, 63, 65, \_\_\_\_\_

Use + or - :

18  9 = 9

Write the hundreds number on the line:

2,015 \_\_\_\_\_


horse													
pig													
goat													
chicken													
cow													

How many pigs? \_\_\_\_\_

How many goats and chickens? \_\_\_\_\_

How many cows and horses? \_\_\_\_\_

How many animals on the farm in all? \_\_\_\_\_



Write a complete sentence answer to the questions about this picture.

1. Where is this ant going?

\_\_\_\_\_

-----

\_\_\_\_\_

-----

\_\_\_\_\_

2. What will the ant do with this pencil?

\_\_\_\_\_

-----

\_\_\_\_\_

-----

\_\_\_\_\_

Name: \_\_\_\_\_


Score: \_\_\_\_\_

### Daily Work

Today is: \_\_\_\_\_

How much?

\_\_\_\_\_



Complete:

Round to nearest ten:

Add the signs: + or—:

117, 115, 113, \_\_\_\_\_

56 \_\_\_\_\_

15  9 = 6    9  8 = 17

Solve:

$$\begin{array}{r} 874 \\ - 672 \\ \hline \end{array}$$

$$\begin{array}{r} 604 \\ + 385 \\ \hline \end{array}$$

- Write the month that comes before JUNE.

\_\_\_\_\_

- Write the month that comes after FEBRUARY.

\_\_\_\_\_

Write a complete sentence answer to the questions about this picture.



1. Where are these children eating their lunches?

\_\_\_\_\_

-----

\_\_\_\_\_

-----

\_\_\_\_\_

2. What is Chris drinking?

\_\_\_\_\_

-----

\_\_\_\_\_

-----

\_\_\_\_\_

Name: \_\_\_\_\_

Score: \_\_\_\_\_

### Daily Work

Today is: \_\_\_\_\_

How much?



\_\_\_\_\_

Circle: ODD EVEN

321

Kelly has 2 coins. Which amount can't she have?

51¢

30¢

13¢

20¢

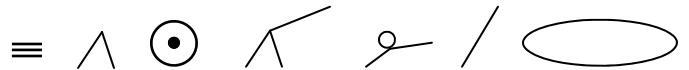
Solve:

$$\begin{array}{r} 878 \\ - 165 \\ \hline \end{array}$$

$$\begin{array}{r} 136 \\ + 243 \\ \hline \end{array}$$

Using only quarters, dimes, nickels, and pennies, show one way to make \$1.18. You must use at least three different valued coins.

Use the editing marks to fix this sentence. Rewrite it correctly.



in september the leavs they beginning to fall from the trees sed mr jones

Handwriting practice lines consisting of solid top and bottom lines with a dashed middle line.

Put the words in ABC order:

hands

handle

handing

hand

handed