

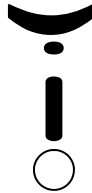
Name: \_\_\_\_\_

Score: \_\_\_\_\_

Date: \_\_\_\_\_

Phonics:

Please mark the vowel sound you hear for the word in the picture.



Sentences: Write a complete sentence answer. Where is the ambulance going?



\_\_\_\_\_

\_\_\_\_\_

\_\_\_\_\_

Math: • Use the graph to answer the questions.


- How many kids like basketball best? \_\_\_\_\_
- How many kids like baseball best? \_\_\_\_\_
- How many kids like soccer best? \_\_\_\_\_

basketball								
baseball								
soccer								

2 + 5 = \_\_\_\_\_

3 - 1 = \_\_\_\_\_

Jim saw 2 bees. Then he saw 3 more bees . How many bees did he see in all?



Jim saw \_\_\_\_\_ bees in all.

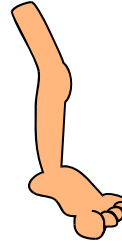
Name: \_\_\_\_\_

Score: \_\_\_\_\_

Date: \_\_\_\_\_

Matching:

leg
beg
peg



\_\_\_\_\_  
\_\_\_\_\_  
\_\_\_\_\_

\_\_\_\_\_  
\_\_\_\_\_  
\_\_\_\_\_

\_\_\_\_\_  
\_\_\_\_\_  
\_\_\_\_\_

Sentences: Write a complete sentence answer. Where is the family going?



\_\_\_\_\_  
\_\_\_\_\_

Math: Write the numbers from 1 to 10. Color the number that comes before 8 blue.

1	2	3	4	5	6	7	8	9	10
---	---	---	---	---	---	---	---	---	----

Bob has 3 pennies. His dad gave him 5 more pennies. How many pennies does Bob have in all?



Bob has \_\_\_\_\_ pennies in all.

3 + 5 = \_\_\_\_\_

4 + 2 = \_\_\_\_\_

5 - 1 = \_\_\_\_\_

Name: \_\_\_\_\_

Score: \_\_\_\_\_

Date: \_\_\_\_\_

Phonics:

Please mark the vowel sound you hear for the word in the picture.



a

e

o

Sentences: Write a sentence about this picture.



\_\_\_\_\_

\_\_\_\_\_

\_\_\_\_\_

\_\_\_\_\_

Math: Rick sees 5 cows in the field. Then, 3 more cows come into the field.

- Draw a picture to show this.
- Write the math problem.

$4 + 5 = \underline{\quad}$

$7 - 3 = \underline{\quad}$

What comes next?



Draw a circle around the fifth star.



Name: \_\_\_\_\_


Score: \_\_\_\_\_

Date: \_\_\_\_\_


Reading: This is Berry Bear. He has a shirt on.



Sentences: Write a sentence about this picture.



Math: Max's favorite fruit is sixth from the X. Please circle it.



$4 + 5 = \underline{\quad}$

$2 + 8 = \underline{\quad}$

$3 - 2 = \underline{\quad}$

$6 - 2 = \underline{\quad}$

Name: \_\_\_\_\_

Score: \_\_\_\_\_

Date: \_\_\_\_\_

ABC Order: Write the words in ABC order:

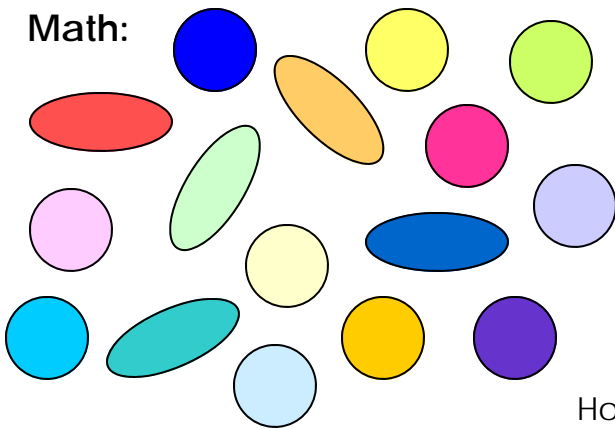
van      man      tan

Sentences: Write a complete sentence answer. Why is the snowman melting?



\_\_\_\_\_  
\_\_\_\_\_  
\_\_\_\_\_

Math:



How many circles do you see? \_\_\_\_\_

How many ovals do you see? \_\_\_\_\_

How many ovals and circle in all? \_\_\_\_\_

How many more circles are there than ovals? \_\_\_\_\_

Please finish: 0, \_\_\_\_\_, \_\_\_\_\_, \_\_\_\_\_, 4, \_\_\_\_\_, 6, \_\_\_\_\_, \_\_\_\_\_, \_\_\_\_\_, \_\_\_\_\_

$2 + 5 = \underline{\quad}$

$3 + 3 = \underline{\quad}$

$5 - 2 = \underline{\quad}$