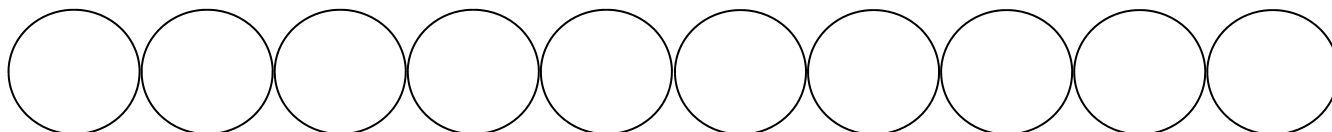


Name: _____

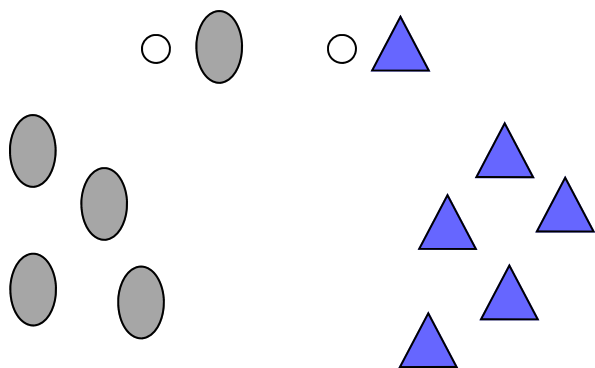
Score: _____

Morning Math

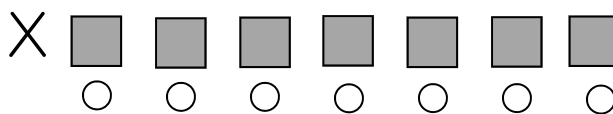
Write the numbers from 1 to 10. Color the number that is one more than 8 green.




Which has less?



Please mark the sixth square from the X.



How many bee wings?



- 3
- 6
- 4

Write the number that comes before.

____, 8

- Please draw a rectangle.
- Please color it blue.

$$\begin{array}{r} 3 \\ + 0 \\ \hline \end{array} \quad 4 + 2 = \underline{\quad}$$

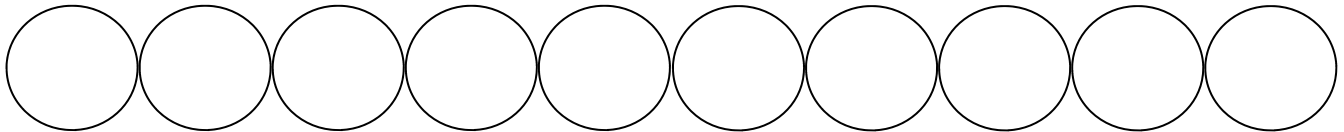
$$\begin{array}{r} 2 \\ + 2 \\ \hline \end{array} \quad 3 + 2 = \underline{\quad}$$

Name: _____

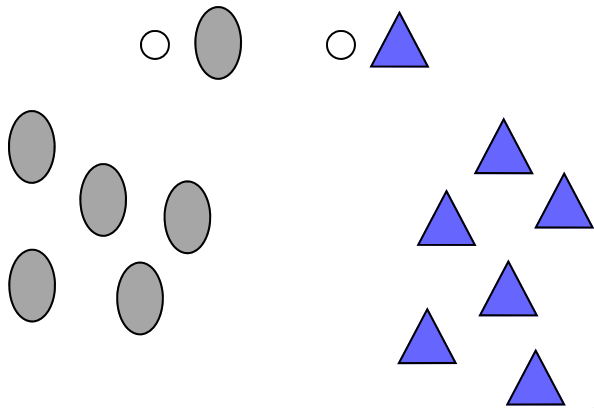
Score: _____

Math Homework

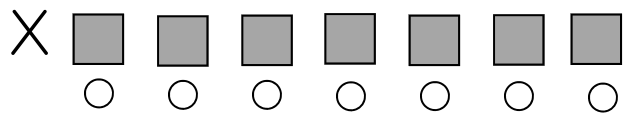
Write the numbers from 1 to 10. Color the number that is one less than 5 blue.



Which has more?



Please mark the third square from the X.



How many bee stingers?



- 3
- 6
- 4

Write the number that comes before.

____, 5

- Please draw a circle.
- Please color it yellow.

$$\begin{array}{r} 5 \\ + 0 \\ \hline \end{array} \quad | \quad 1 + 4 = \underline{\quad}$$

$$\begin{array}{r} 3 \\ + 2 \\ \hline \end{array} \quad 2 + 2 = \underline{\quad}$$