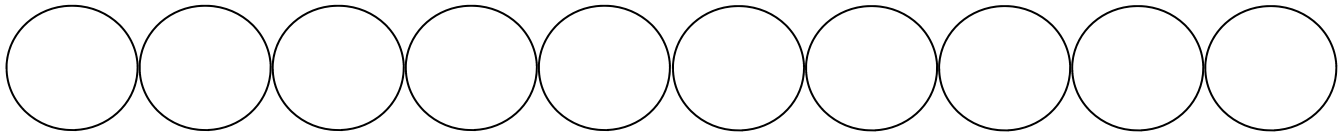


Name: _____

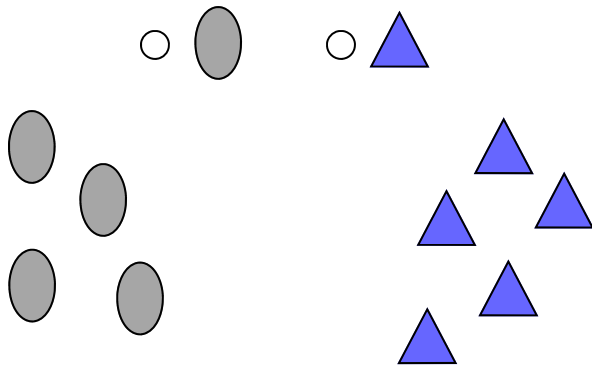
Score: _____

Morning Math

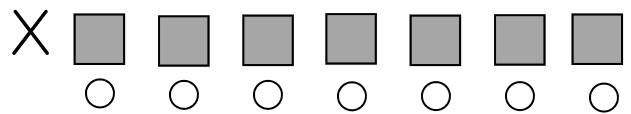
Write the numbers from 1 to 10. Color the number that is one more than 8 green.




Which has less?



Please mark the sixth square from the X.



How many bee wings?



- 3
- 6
- 4

Write the number that comes before.

_____, 8

- Please draw a rectangle.
- Please color it blue.

$$\begin{array}{r} 3 \\ + 0 \\ \hline \end{array} \quad 4 + 2 = \underline{\quad}$$

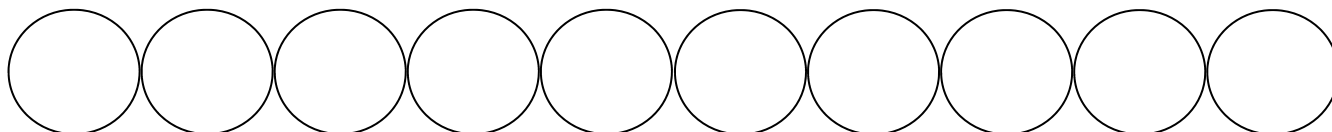
$$\begin{array}{r} 2 \\ + 2 \\ \hline \end{array} \quad 3 + 2 = \underline{\quad}$$

Name: _____

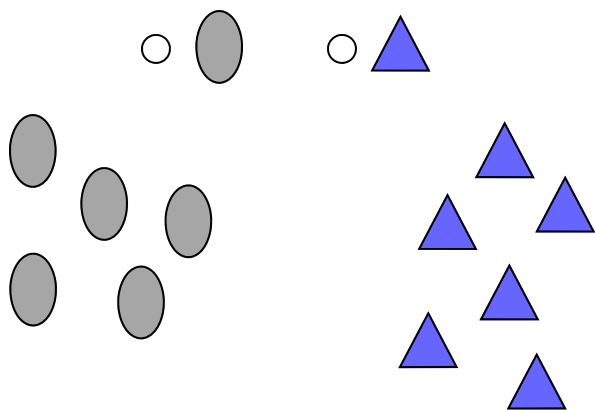
Score: _____

Math Homework

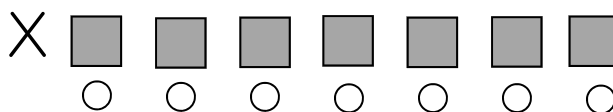
Write the numbers from 1 to 10. Color the number that is one less than 5 blue.




Which has more?



Please mark the third square from the X.



How many bee stingers?



- 3
- 6
- 4

Write the number that comes before.

____, 5

- Please draw a circle.
- Please color it yellow.

$$\begin{array}{r} 5 \\ + 0 \\ \hline \end{array} \quad | \quad 1 + 4 = \underline{\quad}$$

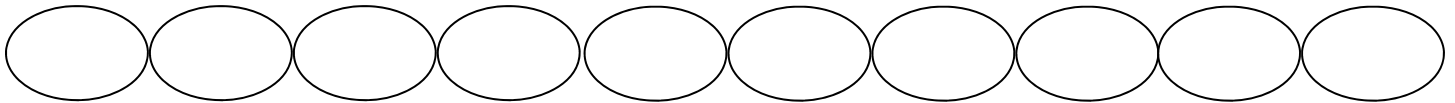
$$\begin{array}{r} 3 \\ + 2 \\ \hline \end{array} \quad 2 + 2 = \underline{\quad}$$

Name: _____

Score: _____

Morning Math

Write the numbers from 1 to 10. Color the number that comes between 3 and 5 red.

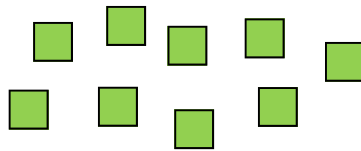


Ann counted 6 blue fish, 3 red fish, and 5 green fish.

Which color of fish has the most?

- red
- blue
- green

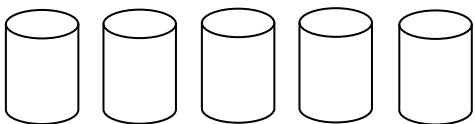
How many squares in all?



Which is smallest?

- a cow
- a puppy
- a barn

Cross out 3 cans.



How many cans are left?

$$\begin{array}{r} 5 \\ - 3 \\ \hline \end{array}$$

$$\begin{array}{r} 3 \\ + 3 \\ \hline \end{array} \quad \begin{array}{r} 2 \\ + 2 \\ \hline \end{array}$$

$$1 + 4 = \underline{\quad}$$

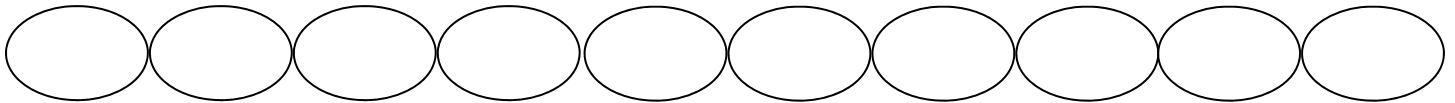
$$4 + 2 = \underline{\quad}$$

Name: _____

Score: _____

Math Homework

Write the numbers from 1 to 10. Color the number that comes between 7 and 9 blue.

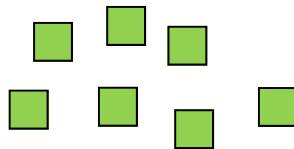


Ted counted 9 red fish, 5 blue fish, and 2 green fish.

Which color of fish has the least?

- red
- blue
- green

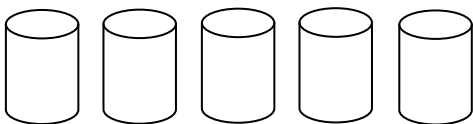
How many squares in all?



Which is largest?

- a cow
- a puppy
- a barn

Cross out 2 cans.



How many cans are left?

$$\begin{array}{r} 5 \\ - 2 \\ \hline \end{array}$$

$$\begin{array}{r} 1 \\ + 3 \\ \hline \end{array} \qquad \begin{array}{r} 3 \\ + 2 \\ \hline \end{array}$$

$$2 + 2 = \underline{\quad}$$

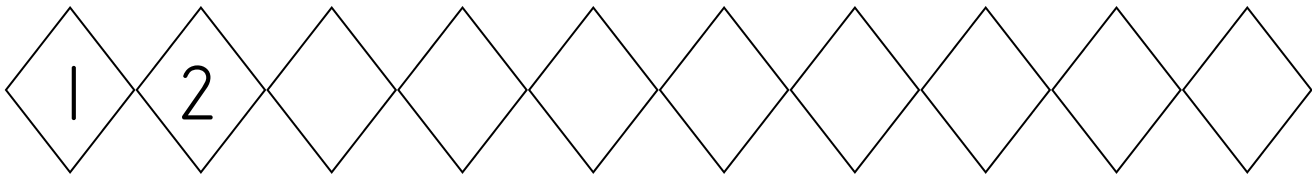
$$1 + 2 = \underline{\quad}$$

Name: _____

Score: _____

Morning Math

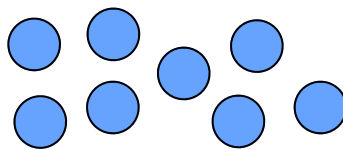
Please continue counting. Color the number 9 blue.



- Draw 3 oranges.
- Draw 3 more oranges.

How many oranges in all? _____

How many circles in all?



Write today's day on the line.

Cross out 1 lion.



How many lions are left?

$$\begin{array}{r} 5 \\ - 1 \\ \hline \end{array}$$

$$\begin{array}{r} 3 \\ + 3 \\ \hline \end{array}$$

$$\begin{array}{r} 4 \\ + 1 \\ \hline \end{array}$$

$$4 + 0 = \underline{\quad}$$

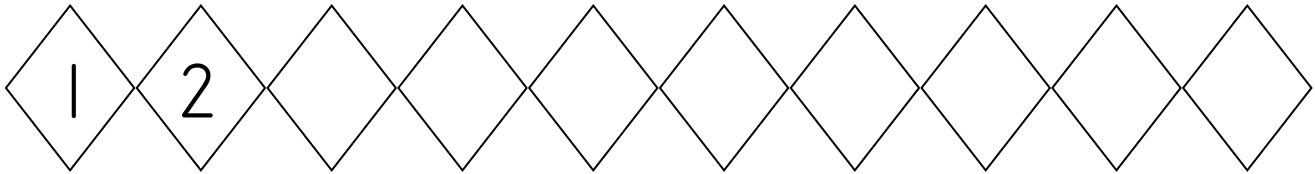
$$2 + 3 = \underline{\quad}$$

Name: _____

Score: _____

Math Homework

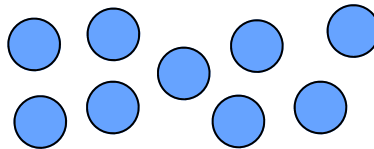
Please continue counting. Color the number 7 yellow.



- Draw 6 oranges.
- Draw 2 more oranges.

How many oranges in all? _____

How many circles in all?



Write today's day on the line.

Cross out 4 lions.



How many lions are left?

$$\begin{array}{r} 5 \\ - 4 \\ \hline \end{array}$$

$$\begin{array}{r} 2 \\ + 2 \\ \hline \end{array} \quad \begin{array}{r} 4 \\ + 1 \\ \hline \end{array}$$

$$5 + 0 = \underline{\quad}$$

$$3 + 1 = \underline{\quad}$$

Name: _____


Score: _____

Morning Math

Write the numbers from 11 to 20. Color the number that comes after 12 green.

--	--	--	--	--	--	--	--	--	--

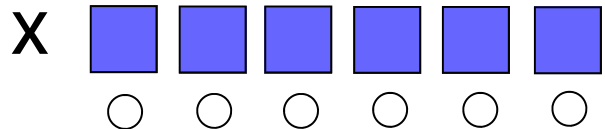
How many?



Write the number that comes after.

13, _____

Mark the fifth square from the X.



B=blue, R=red. Continue the pattern.
Color.

R	R	B	R		
---	---	---	---	--	--

Mark the number that is 1 more than 3.

4 6 7

$$\begin{array}{r} 2 \\ + 2 \\ \hline \end{array} \qquad \begin{array}{r} 3 \\ + 3 \\ \hline \end{array}$$

$$5 + 0 = \underline{\quad}$$

Name: _____

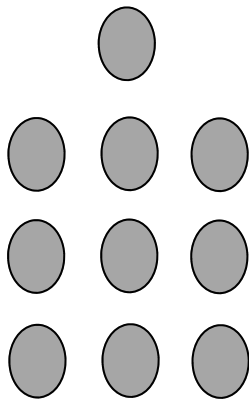
Score: _____

Math Homework

Write the numbers from 11 to 20. Color the number that comes before 15 red.

--	--	--	--	--	--	--	--	--	--

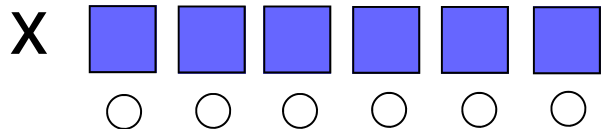
How many?



Write the number that comes before.

_____, 12

Mark the fifth square from the X.



B=blue, R=red. Continue the pattern.
Color.

R	B	R	B		
---	---	---	---	--	--

Mark the number that is 1 more than 5.

4 6 7

○ ○ ○

$$\begin{array}{r} 3 \\ + 3 \\ \hline \end{array} \quad \begin{array}{r} 1 \\ + 2 \\ \hline \end{array}$$

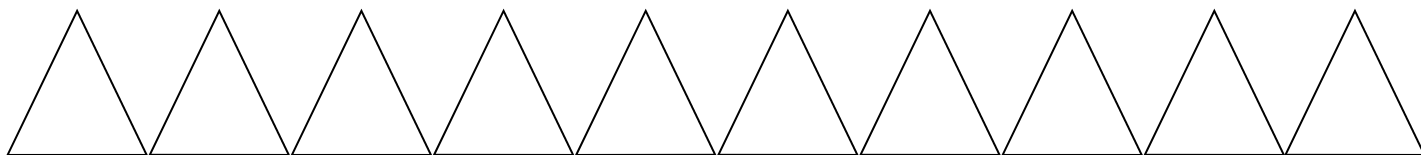
$$4 + 1 = \underline{\quad}$$

Name: _____

Score: _____

Morning Math Test

Please write the numbers from 1 to 10. Color the number that comes before 10 yellow.




How many?



Mark the number that is 1 more than 4.

6 3 5

How many cow legs?



2
 4
 8

Write the number that comes before.

_____, 8

- Please draw a rectangle.
- Color it green.

$$3 + 2 = \underline{\quad\quad}$$
$$\begin{array}{r} 2 \\ + 2 \\ \hline \end{array}$$

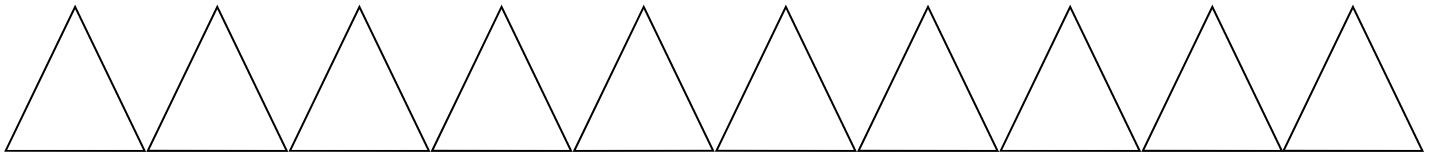
$$\begin{array}{r} 1 \\ + 4 \\ \hline \end{array}$$
$$\begin{array}{r} 0 \\ + 2 \\ \hline \end{array}$$

Name: _____

Score: _____

Math Homework

Please write the numbers from 1 to 10. Color the number that comes after 7 blue.




How many?



Mark the number that is 1 more than 2.

6 3 5

How many cow tails?



2
 4
 8

Write the number that comes after.

8, _____

- Please draw a circle.
- Color it red.

$$3 + 3 = \underline{\quad\quad}$$
$$\begin{array}{r} 2 \\ + 1 \\ \hline \end{array}$$

$$\begin{array}{r} 4 \\ + 2 \\ \hline \end{array}$$
$$\begin{array}{r} 2 \\ + 2 \\ \hline \end{array}$$