

Name: _____

Score: _____


Morning Math

Today is: _____

- Mrs. Brown has 63 rose bushes in her garden, planted in 9 even rows.
- How many rose bushes are in each row?
- Circle the clue words.

$$308 + 264 = \underline{\hspace{2cm}}$$

What is the time?
It is afternoon.

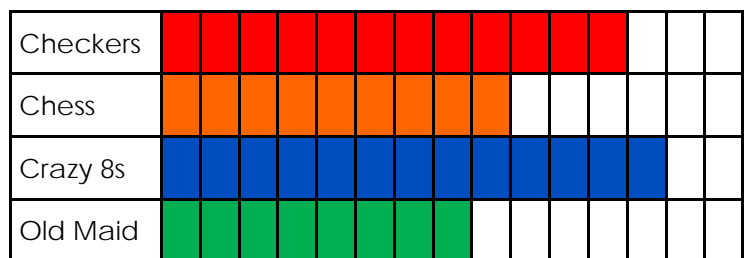


- James has \$8.11 and Patrick has \$11.55.
 - Melinda has \$9.36 and Anita has \$13.19.
 - How much more money does Anita and Melinda have than James and Patrick?
- _____

Use the graph to answer:

- How many kids like Chess? _____
- How many kids like Checkers? _____
- Which game is liked least?

Favorite Games



$$\begin{array}{r} 10 \\ \times 5 \\ \hline \end{array} \quad \begin{array}{r} 12 \\ \times 9 \\ \hline \end{array} \quad \begin{array}{r} 30 \\ \times 7 \\ \hline \end{array} \quad \begin{array}{r} 8 \\ \times 6 \\ \hline \end{array} \quad \begin{array}{r} 4 \\ \times 6 \\ \hline \end{array} \quad \begin{array}{r} 9 \\ \times 3 \\ \hline \end{array}$$

Name: _____

Score: _____

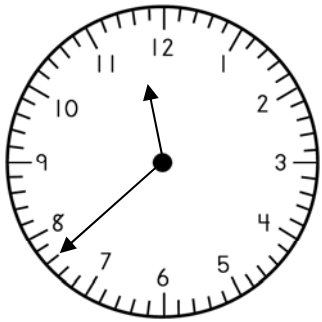
Math Homework

Today is: _____

- Mr. Smith is planting a garden. He wants a total of 42 rose bushes planted in 7 even rows.
- How many rose bushes will he plant in each row?

$$284 + 235 = \underline{\hspace{2cm}}$$

What is the time?
It is night.

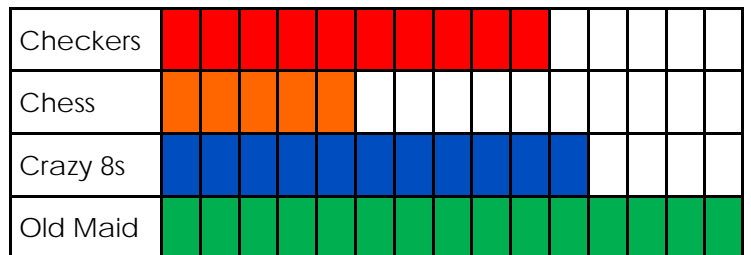


- Natalie has \$9.77 and Sharon has \$7.54.
- Ben has \$12.33 and Jack has \$6.13.
- How much more money does Ben and Jack have than Sharon and Natalie?

Use the graph to answer:

Favorite Games

- How many kids like Crazy 8s? _____
- How many kids like Checkers? _____
- Which game is liked most?



$$\begin{array}{r} 11 \\ \times 5 \\ \hline \end{array}$$

$$\begin{array}{r} 12 \\ \times 8 \\ \hline \end{array}$$

$$\begin{array}{r} 60 \\ \times 8 \\ \hline \end{array}$$

$$\begin{array}{r} 3 \\ \times 6 \\ \hline \end{array}$$

$$\begin{array}{r} 9 \\ \times 7 \\ \hline \end{array}$$

$$\begin{array}{r} 5 \\ \times 5 \\ \hline \end{array}$$