





Name: \_\_\_\_\_

Score: \_\_\_\_\_

Pictograph: Students Who Own Stuffed Bears

|                    |   |   |   |  |   |   |   |   |   |  |
|--------------------|---|---|---|--|---|---|---|---|---|--|
| Miss Jones' Class  |  |  |  |  |  |  |  |   |   |  |
| Mrs. Ames' Class   |  |  |  |  |   |   |   |   |   |  |
| Miss Teals' Class  |  |  |   |  |   |   |   |   |   |  |
| Mrs. Green's Class |  |  |  |  |  |  |  |  |  |  |

 = 2 children

- Write three questions based on this graph and answer them.

Answer:

1. \_\_\_\_\_

\_\_\_\_\_

2. \_\_\_\_\_

\_\_\_\_\_

3. \_\_\_\_\_

\_\_\_\_\_