

Name: _____

Score: _____

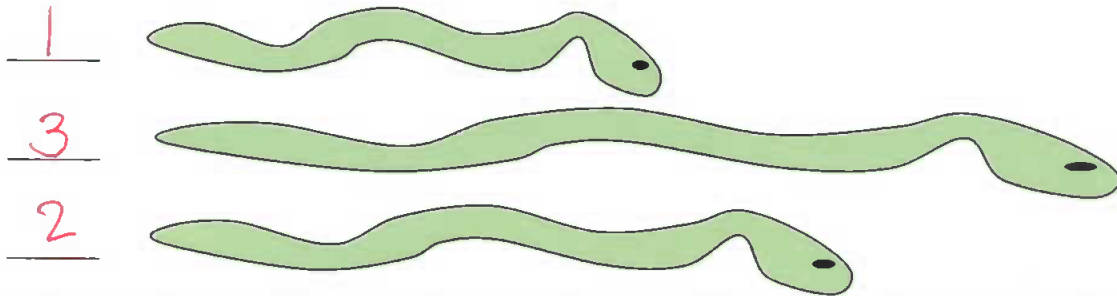
Morning Math

Today is: _____

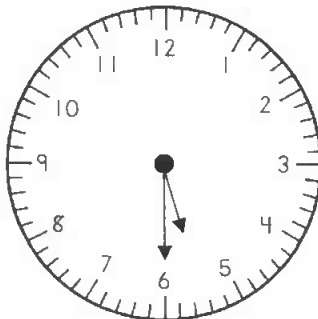
Write the numbers from 21 to 30. Color the number that comes before 25 orange.




• Please label the snakes in order of length from shortest to longest.



What is the time?



How many bat ears in all?



$$\begin{array}{r} 3 \\ + 3 \\ \hline 6 \end{array} \quad \begin{array}{r} 5 \\ + 0 \\ \hline 5 \end{array} \quad \begin{array}{r} 4 \\ + 4 \\ \hline 8 \end{array}$$

$$\begin{array}{r} 5 \\ - 3 \\ \hline 2 \end{array} \quad \begin{array}{r} 4 \\ - 2 \\ \hline 2 \end{array} \quad \begin{array}{r} 7 \\ - 3 \\ \hline 4 \end{array}$$

Name: _____

Score: _____

Math Homework


Today is: _____

Write the numbers from 31 to 40. Color the number that comes after 37 blue.



• Please label the snakes in order of length from shortest to longest.

3



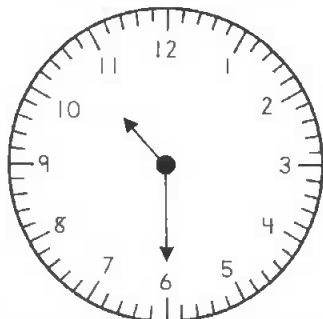
1



2




What is the time?



10:30

How many bat noses in all?



$$\begin{array}{r} 5 \\ + 5 \\ \hline 10 \end{array} \quad \begin{array}{r} 3 \\ + 2 \\ \hline 5 \end{array} \quad \begin{array}{r} 4 \\ + 3 \\ \hline 7 \end{array}$$

$$\begin{array}{r} 6 \\ - 6 \\ \hline 0 \end{array} \quad \begin{array}{r} 3 \\ - 1 \\ \hline 2 \end{array} \quad \begin{array}{r} 5 \\ - 4 \\ \hline 1 \end{array}$$

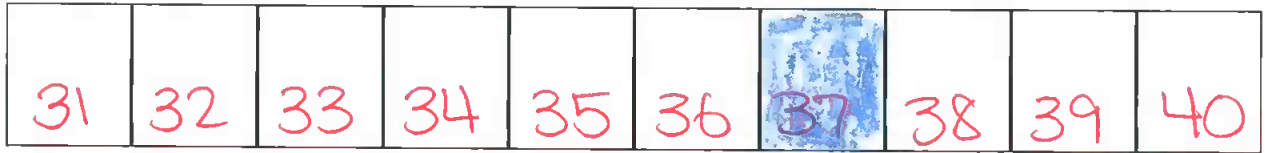
Name: _____

Score: _____


Morning Math

Today is: _____

Write the numbers from 31 to 40. Color the number that comes between 36 and 38 blue.



- Jan counted 5 red fish and 6 blue fish.
- Draw to show the fish.



How many fish in all? _____

Find the missing numbers.

$$6 + \boxed{3} = 9$$

$$5 - \boxed{3} = 2$$

- Write the number represented by the tally marks.

11

Toy plane						
Toy boat						
Toy car						

- More boys own a toy plane.

plane boat car

- How many boys own a toy boat?

6 3 4

$$\begin{array}{r} 5 \\ + 5 \\ \hline 10 \end{array}$$

$$3 + 4 = \underline{7}$$

$$\begin{array}{r} 6 \\ - 4 \\ \hline 2 \end{array}$$

$$7 - 6 = \underline{1}$$

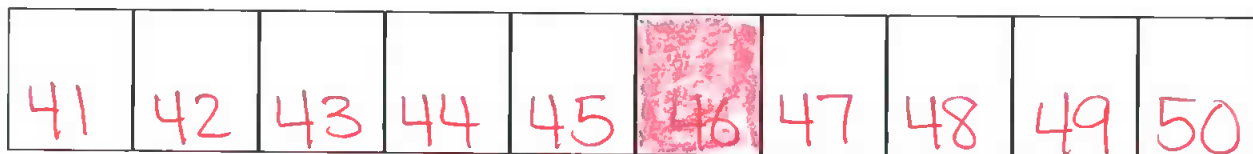
Name: _____

Score: _____


Math Homework

Today is: _____

Write the numbers from 41 to 50. Color the number that comes between 45 and 47 red.



- Pat counted 6 green fish and 3 blue fish.
- Draw to show the fish.



How many fish in all? 9
















Find the missing numbers.

$$5 + \boxed{5} = 10$$

$$6 - \boxed{4} = 2$$

- Write the number represented by the tally marks.

~~||||~~ ||| 8

Toy plane						
Toy boat						
Toy car						

- More boys own a toy boat.

plane boat car

- How many boys own a toy plane?

5 6 4

$$\begin{array}{r} 3 \\ + 3 \\ \hline 6 \end{array}$$

$$6 + 1 = \underline{7}$$

$$\begin{array}{r} 5 \\ - 4 \\ \hline 1 \end{array}$$

$$7 - 3 = \underline{4}$$

Name: _____

Score: _____

Morning Math

Today is: _____

Write the numbers from 51 to 60. Color the number that is 1 less than 56 red.

51 52 53 54 55 56 57 58 59 60

Create a tally mark chart showing:

- 6 kids like red
- 8 kids like blue
- 4 kids like yellow

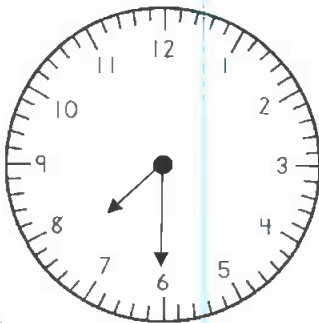
red	blue	yellow
1		

Find the missing numbers.

$$\boxed{4} + 4 = 8$$

$$\boxed{2} + 3 = 5$$

What is the time?



$7:30$

Mark the true statement.

$3 + 4 = 4 + 3$

$1 + 5 = 4 + 1$

$5 + 2 = 3 + 5$

$$\begin{array}{r} 4 \\ + 3 \\ \hline 7 \end{array}$$

$$\begin{array}{r} 2 \\ + 6 \\ \hline 8 \end{array}$$

$$\begin{array}{r} 5 \\ + 1 \\ \hline 6 \end{array}$$

$$\begin{array}{r} 5 \\ - 4 \\ \hline 1 \end{array}$$

$$\begin{array}{r} 7 \\ - 3 \\ \hline 4 \end{array}$$

Name: _____

Score: _____

Math Homework

Today is: _____

Write the numbers from 61 to 70. Color the number that is 1 more than 63 blue.



Create a tally mark chart showing:

- 9 kids like red
- 3 kids like blue
- 6 kids like yellow

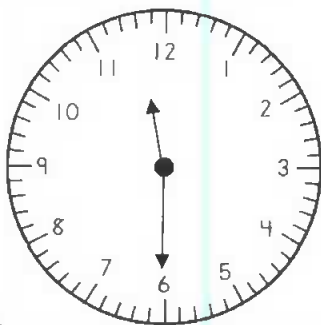
red	blue	yellow

Find the missing numbers.

$$\boxed{5} + 1 = 6$$

$$\boxed{3} + 3 = 6$$

What is the time?



$11:30$

Mark the true statement.

$5 + 3 = 2 + 7$

$3 + 6 = 6 + 2$

$7 + 1 = 1 + 7$

$$\begin{array}{r} 3 \\ + 2 \\ \hline 5 \end{array}$$

$$\begin{array}{r} 4 \\ + 4 \\ \hline 8 \end{array}$$

$$\begin{array}{r} 4 \\ + 2 \\ \hline 6 \end{array}$$

$$\begin{array}{r} 6 \\ - 2 \\ \hline 4 \end{array}$$

$$\begin{array}{r} 6 \\ - 6 \\ \hline 0 \end{array}$$

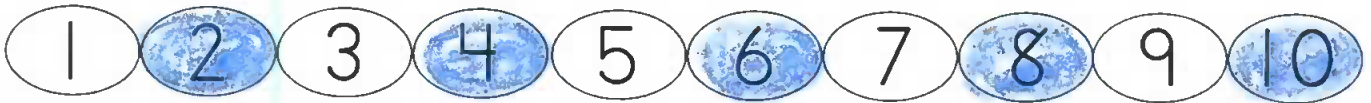
Name: _____

Score: _____


Morning Math

Today is: _____

Color the even numbers blue. The even numbers are 2, 4, 6, 8, and 10.



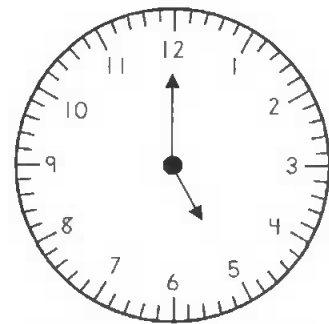
- Mark counted 6 red ovals and 5 blue ovals.
- Draw to show this.



How many ovals did Mark count **altogether**?

11

What is the time?



5:00

Cross out 6 arrows.



How many arrows are left? 5

$$\begin{array}{r} 11 \\ - 6 \\ \hline 5 \end{array}$$

$$\begin{array}{r} 1 \\ + 4 \\ \hline 5 \end{array} \quad \begin{array}{r} 6 \\ + 3 \\ \hline 9 \end{array} \quad \begin{array}{r} 5 \\ + 2 \\ \hline 7 \end{array}$$

$$\begin{array}{r} 7 \\ - 3 \\ \hline 4 \end{array} \quad \begin{array}{r} 3 \\ - 3 \\ \hline 0 \end{array} \quad \begin{array}{r} 6 \\ - 3 \\ \hline 3 \end{array}$$

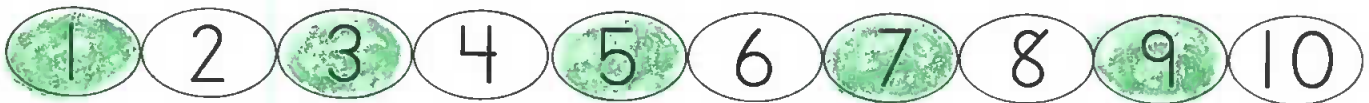
Name: _____

Score: _____

Math Homework

Today is: _____

Color the odd numbers green. The odd numbers are 1, 3, 5, 7, and 9.



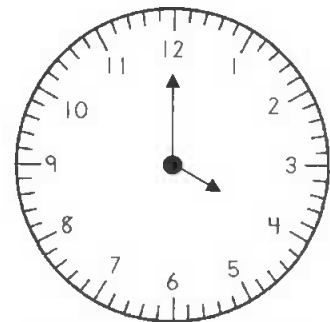
- Pat counted 6 red circles and 3 blue circles.
- Draw to show this.



How many circles did Pat count **altogether**?

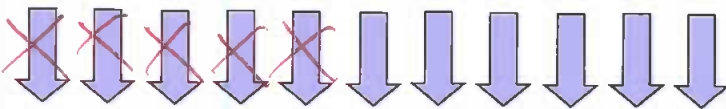
9

What is the time?



4:00

Cross out 5 arrows.



How many arrows are left? 6

$$\begin{array}{r} 11 \\ - 5 \\ \hline 6 \end{array}$$

$$\begin{array}{r} 6 \\ + 3 \\ \hline 9 \end{array} \quad \begin{array}{r} 4 \\ + 4 \\ \hline 8 \end{array} \quad \begin{array}{r} 2 \\ + 3 \\ \hline 5 \end{array}$$

$$\begin{array}{r} 6 \\ - 5 \\ \hline 1 \end{array} \quad \begin{array}{r} 5 \\ - 3 \\ \hline 2 \end{array} \quad \begin{array}{r} 6 \\ - 0 \\ \hline 6 \end{array}$$

Name: _____

Score: _____

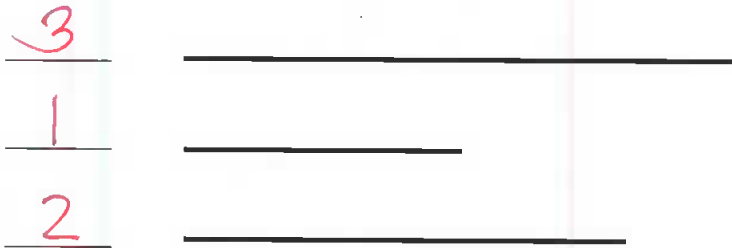
Morning Math

Today is: _____

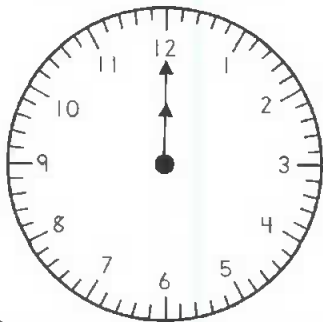
Write the numbers from 31 to 40. Color the number that comes before 37 orange.



- Please label the lines in order of length from shortest to longest.




What is the time?



12:00

How many bear ears?



$$\begin{array}{r} 5 \\ + 5 \\ \hline 10 \end{array}$$
$$\begin{array}{r} 4 \\ + 2 \\ \hline 6 \end{array}$$
$$\begin{array}{r} 3 \\ + 1 \\ \hline 4 \end{array}$$

$$\begin{array}{r} 6 \\ - 6 \\ \hline 0 \end{array}$$
$$\begin{array}{r} 4 \\ - 2 \\ \hline 2 \end{array}$$

Name: _____

Score: _____


Math Homework

Today is: _____

Write the numbers from 31 to 40. Color the number that comes after 33 orange.



- Please label the lines in order of length from shortest to longest.




What is the time?



10:00

How many bear noses?



$$\begin{array}{r} 2 \\ + 2 \\ \hline 4 \end{array}$$
$$\begin{array}{r} 4 \\ + 4 \\ \hline 8 \end{array}$$
$$\begin{array}{r} 5 \\ + 5 \\ \hline 10 \end{array}$$

$$\begin{array}{r} 6 \\ - 3 \\ \hline 3 \end{array}$$
$$\begin{array}{r} 5 \\ - 1 \\ \hline 4 \end{array}$$